


Lee en voz alta estos números

0'01	7'99	0'06	25'90	16'12
84'60	1'03	0'09	3'44	0'80

Completa la tabla



Nº decimal	Enteros	Décimas	Centésimas
0'05	0		
4'09			9
15'60		6	
65'47			
0'99			
27'10			

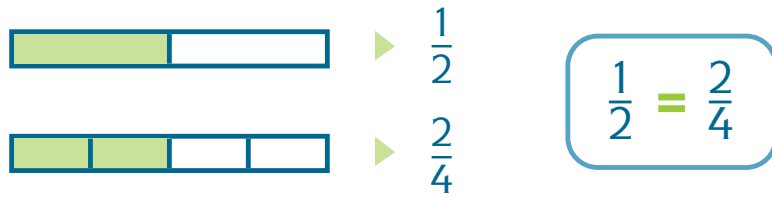
Escribe el número decimal que corresponde a cada fracción decimal

$\frac{5}{10} = 0'5$	$\frac{25}{10} = \dots\dots\dots$	$\frac{35}{100} = 0'35$	$\frac{1}{100} = \dots\dots\dots$
$\frac{14}{10} = \dots\dots\dots$	$\frac{9}{10} = \dots\dots\dots$	$\frac{4}{100} = \dots\dots\dots$	$\frac{20}{100} = \dots\dots\dots$
$\frac{65}{10} = \dots\dots\dots$	$\frac{40}{10} = \dots\dots\dots$	$\frac{100}{100} = \dots\dots\dots$	$\frac{147}{100} = \dots\dots\dots$

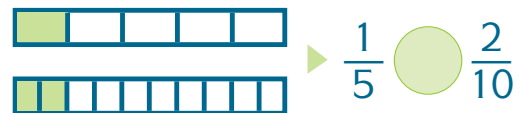
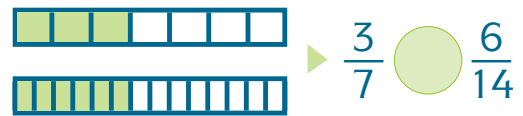
Escribe en forma de fracción decimal estos números decimales

$0'7 = \frac{7}{10}$	$0'1 = \text{---}$	$0'86 = \text{---}$	$0'04 = \text{---}$
$0'68 = \text{---}$	$0'40 = \text{---}$	$0'9 = \text{---}$	$0'10 = \text{---}$

Fíjate



Escribe el signo que corresponda



Completa

