

Por el Bosque Oscuro (A)

Calcula cada suma para hallar tu camino por el bosque

724
+ 270

443
+ 738

286
+ 874

843
+ 673

966
+ 360

689
+ 187

760
+ 580

650
+ 746

209
+ 593

145
+ 914

479
+ 722

494
+ 844

815
+ 466

244
+ 658

315
+ 181

302
+ 231

474
+ 915

871
+ 532

270
+ 491

534
+ 101

403
+ 582

431
+ 333

587
+ 464

558
+ 502

893
+ 349

Por el Bosque Oscuro (A) Respuestas

Calcula cada suma para hallar tu camino por el bosque

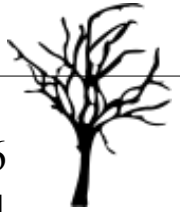


$$\begin{array}{r} 724 \\ + 270 \\ \hline 994 \end{array}$$

$$\begin{array}{r} 443 \\ + 738 \\ \hline 1181 \end{array}$$



$$\begin{array}{r} 286 \\ + 874 \\ \hline 1160 \\ 843 \\ + 673 \\ \hline 1516 \end{array}$$



$$\begin{array}{r} 966 \\ + 360 \\ \hline 1326 \end{array}$$



$$\begin{array}{r} 689 \\ + 187 \\ \hline 876 \end{array}$$



$$\begin{array}{r} 760 \\ + 580 \\ \hline 1340 \end{array}$$



$$\begin{array}{r} 650 \\ + 746 \\ \hline 1396 \end{array}$$



$$\begin{array}{r} 209 \\ + 593 \\ \hline 802 \end{array}$$



$$\begin{array}{r} 145 \\ + 914 \\ \hline 1059 \end{array}$$



$$\begin{array}{r} 494 \\ + 844 \\ \hline 1338 \end{array}$$



$$\begin{array}{r} 815 \\ + 466 \\ \hline 1281 \end{array}$$



$$\begin{array}{r} 479 \\ + 722 \\ \hline 1201 \end{array}$$



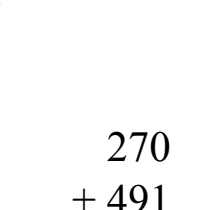
$$\begin{array}{r} 302 \\ + 231 \\ \hline 533 \end{array}$$



$$\begin{array}{r} 474 \\ + 915 \\ \hline 1389 \end{array}$$



$$\begin{array}{r} 244 \\ + 658 \\ \hline 902 \end{array}$$



$$\begin{array}{r} 315 \\ + 181 \\ \hline 496 \end{array}$$



$$\begin{array}{r} 534 \\ + 101 \\ \hline 635 \end{array}$$



$$\begin{array}{r} 403 \\ + 582 \\ \hline 985 \end{array}$$



$$\begin{array}{r} 871 \\ + 532 \\ \hline 1403 \end{array}$$

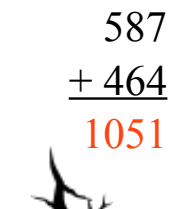
$$\begin{array}{r} 270 \\ + 491 \\ \hline 761 \end{array}$$



$$\begin{array}{r} 431 \\ + 333 \\ \hline 764 \end{array}$$



$$\begin{array}{r} 587 \\ + 464 \\ \hline 1051 \end{array}$$



$$\begin{array}{r} 558 \\ + 502 \\ \hline 1060 \end{array}$$



$$\begin{array}{r} 893 \\ + 349 \\ \hline 1242 \end{array}$$



$$\begin{array}{r} 893 \\ + 349 \\ \hline 1242 \end{array}$$

