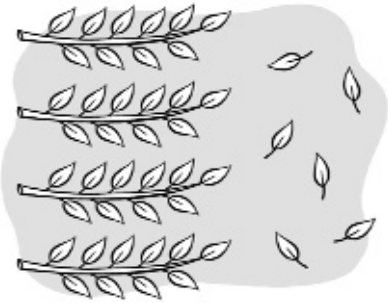


Nombre \_\_\_\_\_ Fecha \_\_\_\_\_

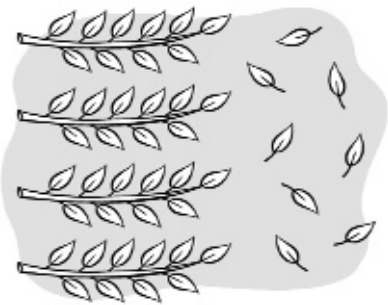
**1** Cuenta, completa y escribe.

REFUERZO



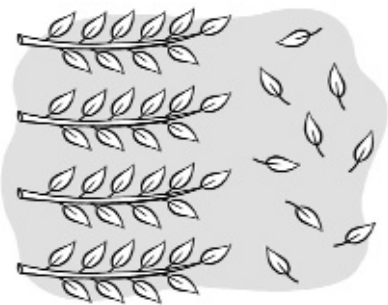
$$40 + 6 = 46$$

46 ► cuarenta y seis



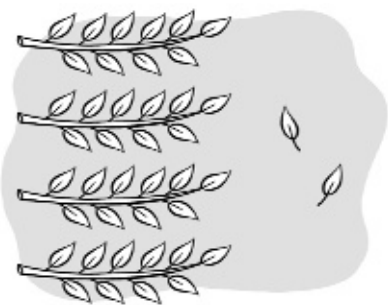
$$\square + \square = \square$$

$\square$  ► \_\_\_\_\_



$$\square + \square = \square$$

$\square$  ► \_\_\_\_\_



$$\square + \square = \square$$

$\square$  ► \_\_\_\_\_