


1 Rodea el número anterior y tacha el posterior.

| | | | |
|----|---|----|----|
| 25 | 7 | 21 | 26 |
| 24 | 5 | 18 | 29 |
| 22 | 8 | 20 | 27 |

2 Coloca y calcula.

| | | | | |
|----------------------|----------------------|----------------------|----------------------|----------------------|
| $7 + 7$ | $9 + 5$ | $8 - 7$ | $9 - 2$ | $6 + 7$ |
| <input type="text"/> | <input type="text"/> | <input type="text"/> | <input type="text"/> | <input type="text"/> |
| <input type="text"/> | <input type="text"/> | <input type="text"/> | <input type="text"/> | <input type="text"/> |
| <input type="text"/> | <input type="text"/> | <input type="text"/> | <input type="text"/> | <input type="text"/> |

3 Ordena y escribe los nombres de los recipientes de menor a mayor capacidad.



| |
|--|
| |
| |
| |

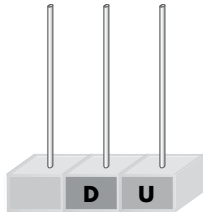
4 Sigue la serie.

15 $\xrightarrow{+2}$ $\xrightarrow{+2}$ $\xrightarrow{+2}$ $\xrightarrow{+2}$ $\xrightarrow{+2}$ $\xrightarrow{+2}$ $\xrightarrow{+2}$

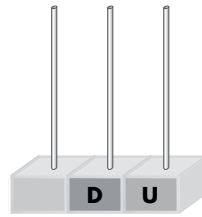


5 Dibuja en el ábaco y escribe cómo se lee cada número.

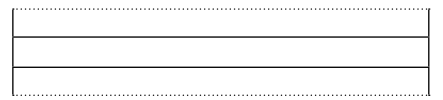
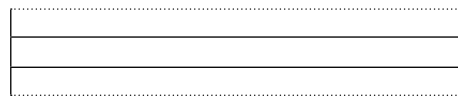
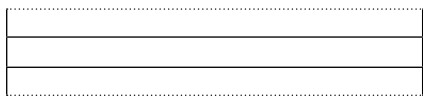
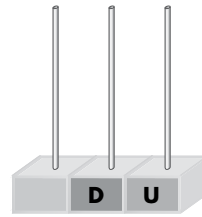
24



27



26




6 Colorea los roscones según se indica:

Tiene 2 D y 6 U → verde


$10 + 6$ → amarillo

El anterior a 24 → rojo


$9 - 4$ → naranja




5



26



23



16

7 Compara los recipientes de cada recuadro y colorea aquel en el que cabe más.

