




LABERINTOS MATEMÁTICOS

Nombre y apellidos:

Curso:

Fecha:

SALIDA



x 2




x 4



+ 3



+ 2





LABERINTOS MATEMÁTICOS

Nombre y apellidos:

Curso:

Fecha:

SALIDA

20 $\div 2$ $+ 8$

$\div 3$

$+ 6$ $\times 5$

$\div 6$

$- 4$ $\times 9$

$+ 10$

$\times 5$ $\div 4$

$+ 5$

$\div 8$ $- 3$





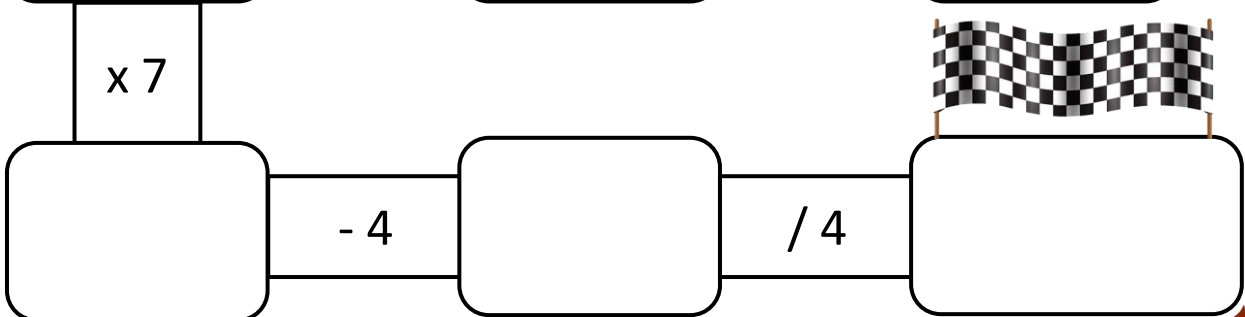


LABERINTOS MATEMÁTICOS

Nombre y apellidos:

Curso:

Fecha:

SALIDA



$/ 5$

$- 5$

$+ 9$

$\times 7$

