


$$2 + 2 + 2 + 2 + 2 = 10$$

$$2 \times 5 = 10$$



$$\square + \square + \square + \square = \square$$

$$\square \times \square = \square$$




$$\square + \square + \square = \square$$

$$\square \times \square = \square$$



$$\square + \square + \square + \square = \square$$

$$\square \times \square = \square$$




$$\square + \square + \square + \square + \square = \square$$

$$\square \times \square = \square$$




$$\square + \square + \square + \square + \square + \square + \square + \square = \square$$

$$\square \times \square = \square$$



$$\square + \square + \square = \square$$

$$\square \times \square = \square$$



$$\square + \square + \square + \square + \square + \square = \square$$

$$\square \times \square = \square$$



$$\square + \square + \square + \square = \square$$

$$\square \times \square = \square$$