



12 Busca cinco diferencias.



$$\begin{array}{r} 532 \\ -433 \\ \hline \end{array}$$

$$\begin{array}{r} 5578 \\ -499 \\ \hline \end{array}$$

$$\begin{array}{r} 65482 \\ -61373 \\ \hline \end{array}$$

$$\begin{array}{r} 147 \\ -98 \\ \hline \end{array}$$

$$\begin{array}{r} 4933 \\ -948 \\ \hline \end{array}$$

$$\begin{array}{r} 86325 \\ -85714 \\ \hline \end{array}$$

$$8 + 9008 = \dots\dots\dots$$

$$9 + 9008 = \dots\dots\dots$$

$$10 + 9008 = \dots\dots\dots$$

$$11 + 9008 = \dots\dots\dots$$

$$\begin{array}{r} 6154 \\ -1346 \\ \hline \end{array}$$

$$\begin{array}{r} 4865 \\ -4009 \\ \hline \end{array}$$

$$\begin{array}{r} 91679 \\ -81819 \\ \hline \end{array}$$

$$\begin{array}{r} 2647 \\ -483 \\ \hline \end{array}$$

$$\begin{array}{r} 49380 \\ -38490 \\ \hline \end{array}$$

$$\begin{array}{r} 12270 \\ -4733 \\ \hline \end{array}$$

$$\begin{array}{r} 6809 \\ -5393 \\ \hline \end{array}$$

$$\begin{array}{r} 46709 \\ -3825 \\ \hline \end{array}$$

$$\begin{array}{r} 13876 \\ -8876 \\ \hline \end{array}$$

$$\begin{array}{r} 2651 \\ -2602 \\ \hline \end{array}$$

$$\begin{array}{r} 68641 \\ -9864 \\ \hline \end{array}$$

$$\begin{array}{r} 733 \\ -377 \\ \hline \end{array}$$

$$\begin{array}{r} 9805 \\ -6539 \\ \hline \end{array}$$

$$\begin{array}{r} 74298 \\ -54887 \\ \hline \end{array}$$

$$\begin{array}{r} 985 \\ -689 \\ \hline \end{array}$$


$$9008 - 8 = \dots\dots\dots$$

$$9008 - 9 = \dots\dots\dots$$


$$9008 - 10 = \dots\dots\dots$$

$$9008 - 11 = \dots\dots\dots$$


Calcula el valor de cada objeto.



$$\boxed{18}$$



$$\boxed{\phantom{00}}$$



$$\boxed{\phantom{00}}$$



$$+ \text{ [calculator icon]} = 18$$



$$- \text{ [calculator icon]} = 10$$



$$+ \text{ [headphones icon]} = 18$$