



# Números a la carta

Ficha 1	Números hasta el 9	3	Ficha 16	Sumas y restas de decenas	18
Ficha 2	Descomposición de números hasta el 9	4	Ficha 17	Números hasta el 39: series	19
Ficha 3	Sumas con números hasta el 9	5	Ficha 18	Sumas sin llevar con números hasta el 39	20
Ficha 4	Series y orden de número hasta el 9	6	Ficha 19	Escritura de números del 40 al 59	21
Ficha 5	Restas con números hasta el 9	7	Ficha 20	Restas sin llevar con números hasta el 59	22
Ficha 6	La decena	8	Ficha 21	Números hasta el 79: series y descomposición	23
Ficha 7	Sumas con números hasta el 10	9	Ficha 22	Escritura de números hasta el 89	24
Ficha 8	Series de números hasta el 19	10	Ficha 23	Números hasta el 99	25
Ficha 9	Sumas con números hasta el 19	11	Ficha 24	Escritura de números hasta el 99	26
Ficha 10	Sumas con números hasta el 19 (tres sumandos)	12	Ficha 25	Sumas y restas sin llevar con números hasta el 99	27
Ficha 11	Restas contando a partir del sustraendo	13	Ficha 26	Comparación de números hasta el 99	28
Ficha 12	Lectura y escritura de números hasta el 19	14	Ficha 27	Sumas de tres números sin llevar	29
Ficha 13	Restas con números hasta el 19	15	Ficha 28	Sumas de dos números llevando	30
Ficha 14	Números hasta el 29: series y descomposición	16	Ficha 29	Sumas de tres números llevando	31
Ficha 15	La decena: series, lectura y escritura	17	Ficha 30	Sumas llevando y restas sin llevar	32



**Números a la carta 1** es una obra colectiva, concebida, creada y realizada en el Departamento de Primaria de Santillana Educación, S. L., bajo la dirección de JOSÉ LUIS ALZU GOÑI.

**Ilustración:** Marimar Ferrero

**Edición:** Mar García González y José Tomás Henao

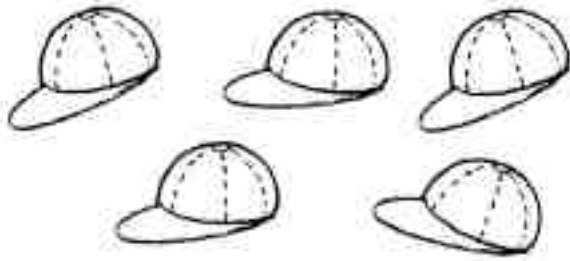
© 2007 by Santillana Educación, S. L.  
Torrelaguna, 60. 28043 Madrid  
PRINTED IN SPAIN  
Impreso en España por

CP: 851933  
Depósito legal:


El presente cuaderno está protegido por las leyes de derechos de autor y su propiedad intelectual le corresponde a Santillana. A los legítimos usuarios del mismo solo les está permitido realizar fotocopias de este material para uso como material de aula. Queda prohibida cualquier utilización fuera de los usos permitidos, especialmente aquella que tenga fines comerciales.

Nombre \_\_\_\_\_ Fecha \_\_\_\_\_

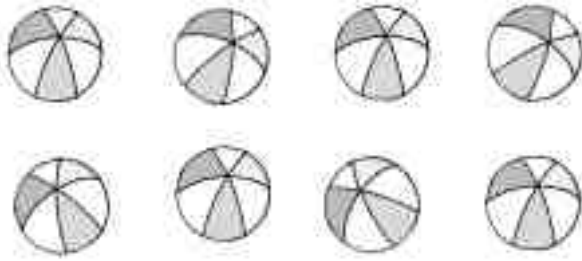
**1. Cuenta y rodea el número.**



3 5 7




2 4 6



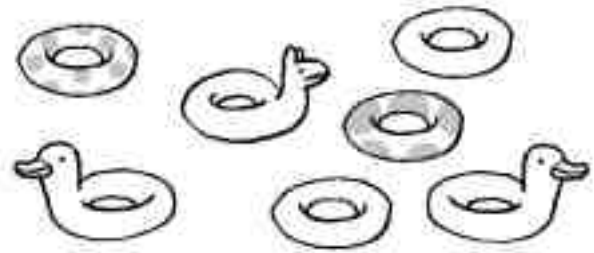
6 7 8



1 4 8



3 6 9



5 6 7

**2. Completa.**



# Descomposición de números hasta el 9

Nombre \_\_\_\_\_ Fecha \_\_\_\_\_

## 1. Observa y completa.

	$4 + 5 = 9$
--	-------------

	$\square + \square = \square$
--	-------------------------------

	$\square + \square = \square$
--	-------------------------------

	$\square + \square = \square$
--	-------------------------------

	$\square + \square = \square$
--	-------------------------------

	$3 + \square = \square$
--	-------------------------

	$\square + \square = \square$
--	-------------------------------

	$\square + \square = \square$
--	-------------------------------

	$\square + \square = \square$
--	-------------------------------


	$\square + \square = \square$
--	-------------------------------

Nombre \_\_\_\_\_ Fecha \_\_\_\_\_

1. Escribe los números y suma.



$$\boxed{2} + \boxed{\phantom{0}} = \boxed{3}$$



$$\boxed{\phantom{0}} + \boxed{\phantom{0}} = \boxed{\phantom{0}}$$



$$\boxed{\phantom{0}} + \boxed{\phantom{0}} = \boxed{\phantom{0}}$$




$$\boxed{\phantom{0}} + \boxed{\phantom{0}} = \boxed{\phantom{0}}$$

2. Dibuja y suma.

$$3 + 2 = \boxed{\phantom{0}}$$




$$3 + 3 = \boxed{\phantom{0}}$$



$$4 + 2 = \boxed{\phantom{0}}$$

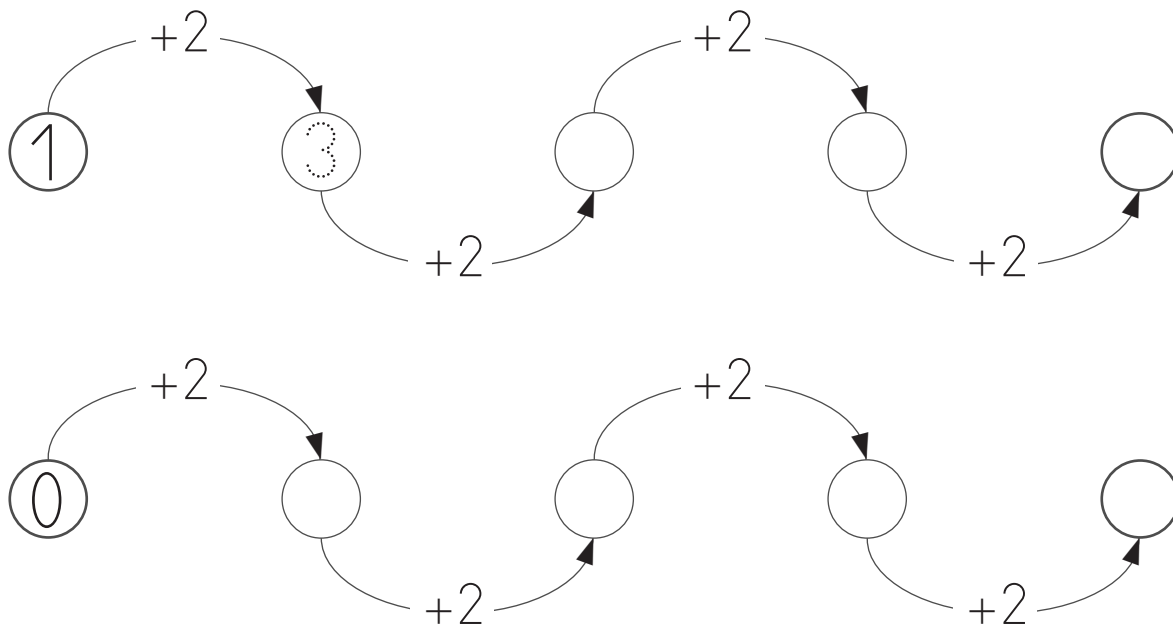


$$6 + 2 = \boxed{\phantom{0}}$$

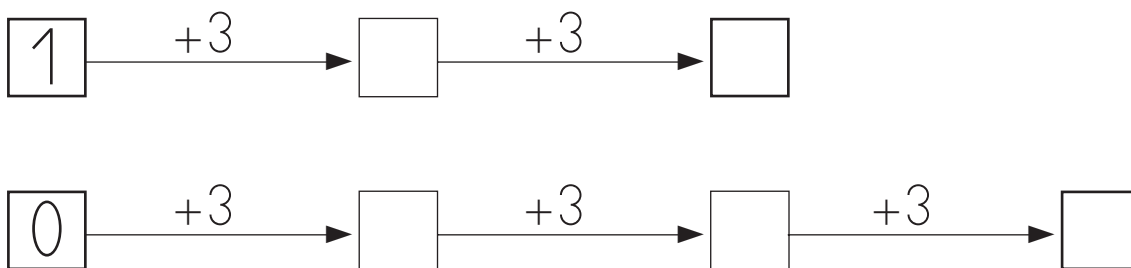


Nombre \_\_\_\_\_ Fecha \_\_\_\_\_

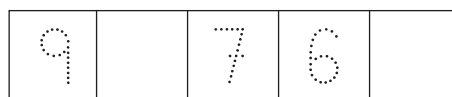

1. Completa.



2. Completa.



3. Escribe los números que faltan.



Nombre \_\_\_\_\_ Fecha \_\_\_\_\_

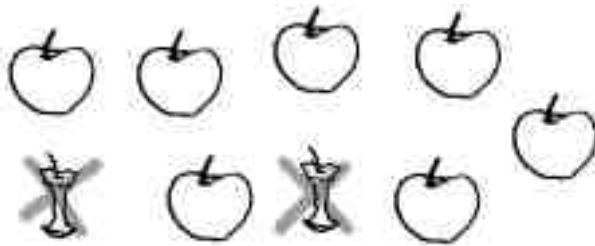
1. Completa.



$$\boxed{5} - \boxed{3} = \boxed{2}$$




$$\boxed{\phantom{0}} - \boxed{\phantom{0}} = \boxed{\phantom{0}}$$



$$\boxed{\phantom{0}} - \boxed{\phantom{0}} = \boxed{\phantom{0}}$$



$$\boxed{\phantom{0}} - \boxed{\phantom{0}} = \boxed{\phantom{0}}$$




$$\boxed{\phantom{0}} - \boxed{\phantom{0}} = \boxed{\phantom{0}}$$



$$\boxed{\phantom{0}} - \boxed{\phantom{0}} = \boxed{\phantom{0}}$$



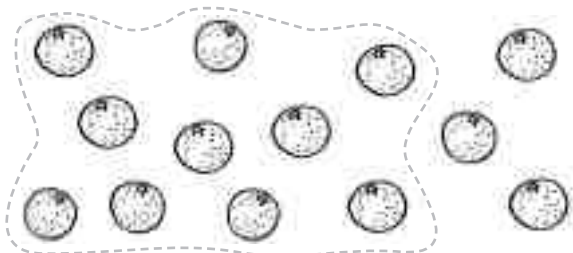
$$\boxed{\phantom{0}} - \boxed{\phantom{0}} = \boxed{\phantom{0}}$$



$$\boxed{\phantom{0}} - \boxed{\phantom{0}} = \boxed{\phantom{0}}$$

Nombre \_\_\_\_\_ Fecha \_\_\_\_\_

## 1. Rodea 10 en cada grupo y suma.




$$10 + \boxed{3} = \boxed{13}$$




$$10 + \boxed{\phantom{00}} = \boxed{\phantom{00}}$$



$$10 + \boxed{\phantom{00}} = \boxed{\phantom{00}}$$



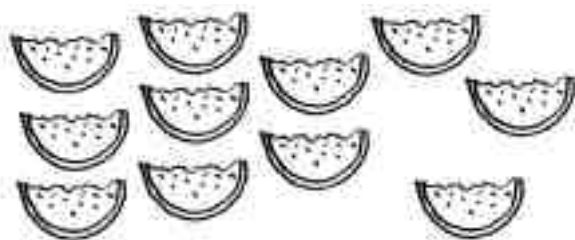
$$10 + \boxed{\phantom{00}} = \boxed{\phantom{00}}$$



$$10 + \boxed{\phantom{00}} = \boxed{\phantom{00}}$$



$$10 + \boxed{\phantom{00}} = \boxed{\phantom{00}}$$



$$10 + \boxed{\phantom{00}} = \boxed{\phantom{00}}$$



$$10 + \boxed{\phantom{00}} = \boxed{\phantom{00}}$$



Nombre \_\_\_\_\_ Fecha \_\_\_\_\_

**1. Suma.**

$5 + 4 = \square$

$7 + 3 = \square$

$4 + 2 = \square$

$6 + 2 = \square$

$5 + 2 = \square$

$5 + 1 = \square$

$4 + 3 = \square$

$7 + 1 = \square$

$6 + 4 = \square$

$4 + 1 = \square$

$8 + 2 = \square$

$5 + 0 = \square$

$7 + 2 = \square$

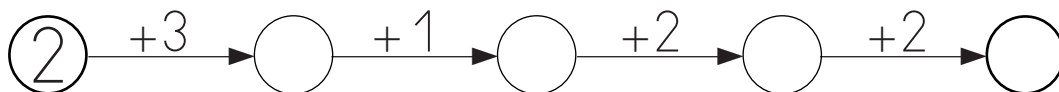
$5 + 3 = \square$

$6 + 1 = \square$

$3 + 0 = \square$

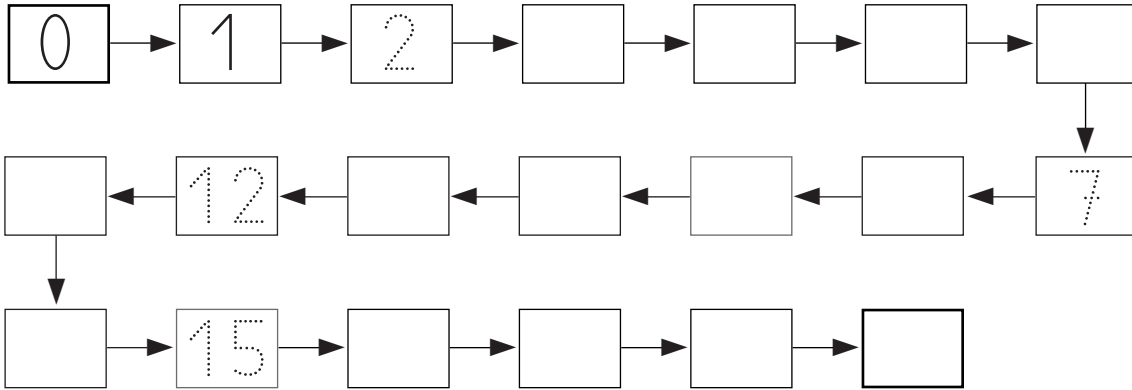
$6 + 3 = \square$

$9 + 1 = \square$

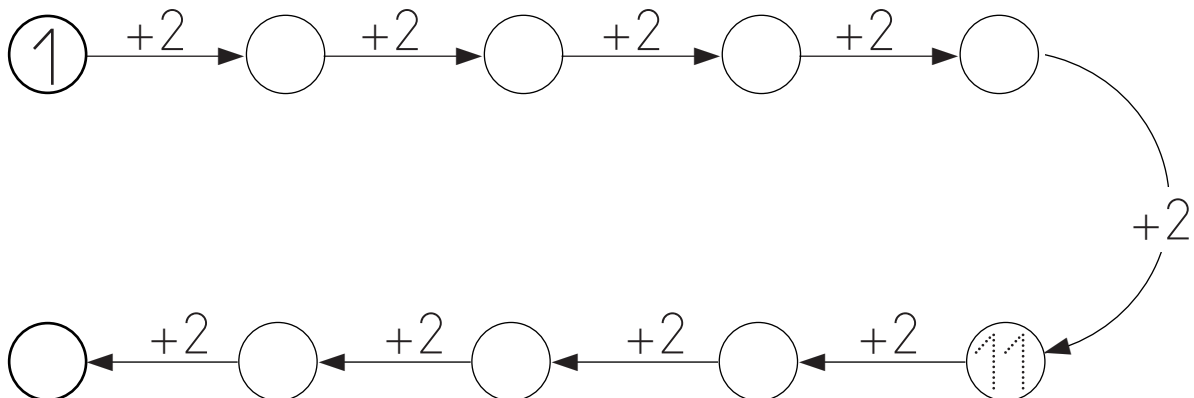
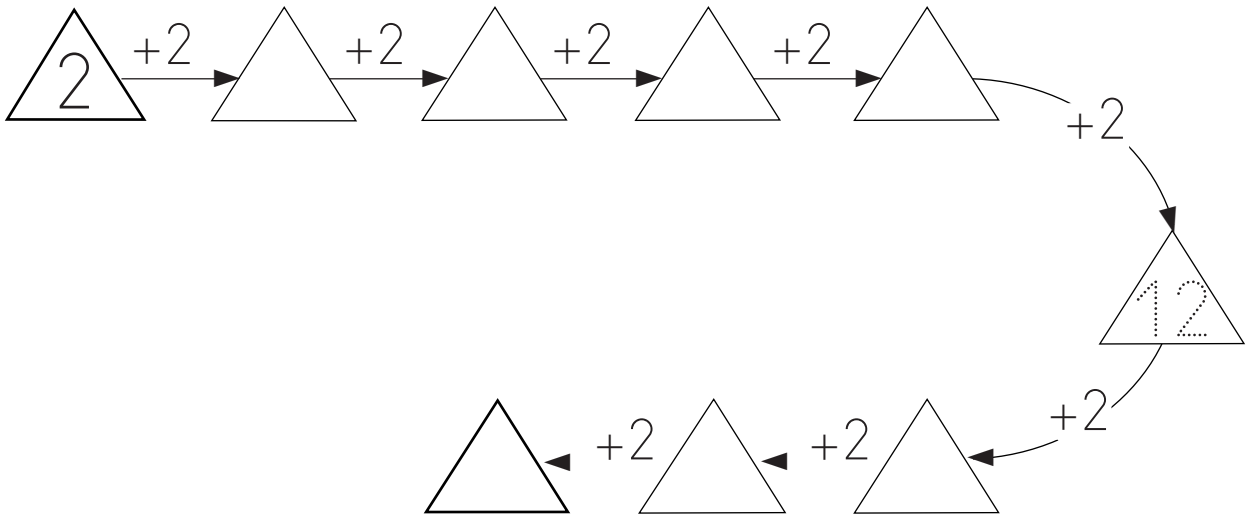
**2. Completa.**

Nombre \_\_\_\_\_ Fecha \_\_\_\_\_

## 1. Completa.



## 2. Suma.



Nombre \_\_\_\_\_ Fecha \_\_\_\_\_

1. Suma.

$15 + 4 = \square$

$5 + 5 = \square$

$8 + 3 = \square$

$9 + 5 = \square$

$11 + 6 = \square$

$18 + 1 = \square$

$12 + 3 = \square$

$17 + 2 = \square$

$6 + 4 = \square$

$14 + 2 = \square$

$12 + 6 = \square$

$10 + 8 = \square$

$8 + 4 = \square$

$16 + 3 = \square$

$7 + 4 = \square$

$16 + 2 = \square$

$10 + 4 = \square$

$13 + 5 = \square$

$13 + 3 = \square$

$14 + 5 = \square$

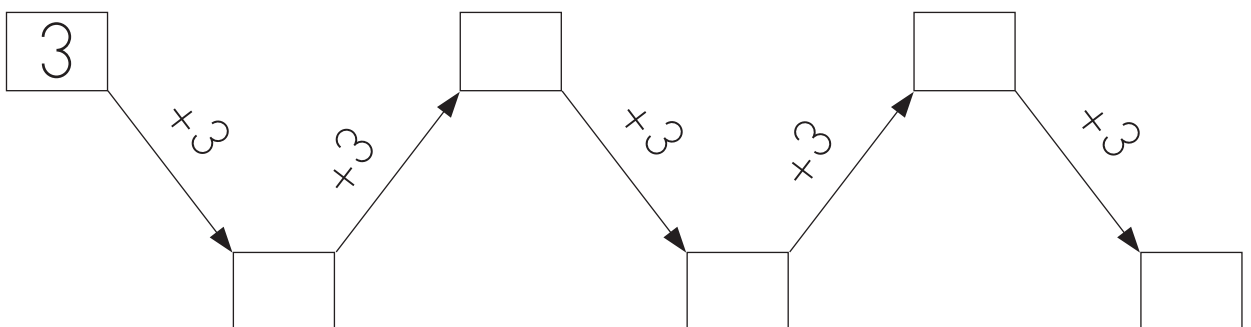
$16 + 1 = \square$

$10 + 5 = \square$

$7 + 6 = \square$

$15 + 2 = \square$

2. Completa.



## Sumas con números hasta el 19 (tres sumandos)

Nombre \_\_\_\_\_ Fecha \_\_\_\_\_

## 1. Completa y suma.

$$\begin{array}{c}
 4 + 2 + 2 \\
 \swarrow \quad \searrow \quad \downarrow \\
 \boxed{6} + \boxed{2} = \boxed{\phantom{00}}
 \end{array}$$

$$\begin{array}{c}
 6 + 2 + 3 \\
 \swarrow \quad \searrow \quad \downarrow \\
 \boxed{\phantom{00}} + \boxed{\phantom{00}} = \boxed{\phantom{00}}
 \end{array}$$

$$\begin{array}{c}
 5 + 3 + 4 \\
 \swarrow \quad \searrow \quad \downarrow \\
 \boxed{\phantom{00}} + \boxed{\phantom{00}} = \boxed{\phantom{00}}
 \end{array}$$

$$\begin{array}{c}
 3 + 3 + 5 \\
 \swarrow \quad \searrow \quad \downarrow \\
 \boxed{\phantom{00}} + \boxed{\phantom{00}} = \boxed{\phantom{00}}
 \end{array}$$

$$\begin{array}{c}
 8 + 7 + 4 \\
 \swarrow \quad \searrow \quad \downarrow \\
 \boxed{\phantom{00}} + \boxed{\phantom{00}} = \boxed{\phantom{00}}
 \end{array}$$

$$\begin{array}{c}
 7 + 3 + 4 \\
 \swarrow \quad \searrow \quad \downarrow \\
 \boxed{\phantom{00}} + \boxed{\phantom{00}} = \boxed{\phantom{00}}
 \end{array}$$

## 2. Suma.

$$5 + 1 + 3 = \boxed{\phantom{00}}$$

$$5 + 2 + 3 = \boxed{\phantom{00}}$$

$$6 + 1 + 2 = \boxed{\phantom{00}}$$

$$4 + 2 + 5 = \boxed{\phantom{00}}$$

$$4 + 3 + 3 = \boxed{\phantom{00}}$$

$$9 + 1 + 7 = \boxed{\phantom{00}}$$

Nombre \_\_\_\_\_ Fecha \_\_\_\_\_

**1. Resta.**

$6 - 4$     1 2 3 4 5 6 7 8 9     $6 - 4 = 2$

$7 - 5$     1 2 3 4 5 6 7 8 9     $7 - 5 = \square$

$5 - 4$     1 2 3 4 5 6 7 8 9     $5 - 4 = \square$

$7 - 2$     1 2 3 4 5 6 7 8 9     $7 - 2 = \square$

$4 - 1$     1 2 3 4 5 6 7 8 9     $4 - 1 = \square$

$8 - 3$     1 2 3 4 5 6 7 8 9     $8 - 3 = \square$

$9 - 6$     1 2 3 4 5 6 7 8 9     $9 - 6 = \square$

$3 - 2$     1 2 3 4 5 6 7 8 9     $3 - 2 = \square$

$6 - 3$     1 2 3 4 5 6 7 8 9     $6 - 3 = \square$

## Lectura y escritura de números hasta el 19

Nombre \_\_\_\_\_ Fecha \_\_\_\_\_

## 1. Completa.

0 1 2 3 4 5 6 7 8 9 10 11 12 13 14 15 16 17 18 19 

## 2. Une.

Quince

Ocho

Once

Dieciséis

11

15

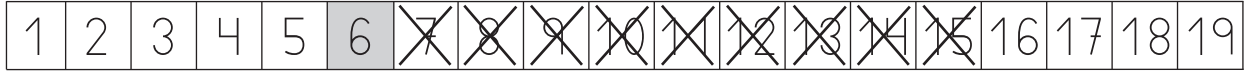
16

8

Nombre \_\_\_\_\_ Fecha \_\_\_\_\_

1. Cuenta y completa las restas.

$$15 - 6 = \boxed{9}$$



$$11 - 5 = \boxed{\phantom{00}}$$



$$13 - 8 = \boxed{\phantom{00}}$$



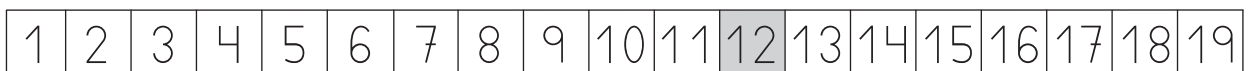
$$14 - 7 = \boxed{\phantom{00}}$$



$$12 - 8 = \boxed{\phantom{00}}$$

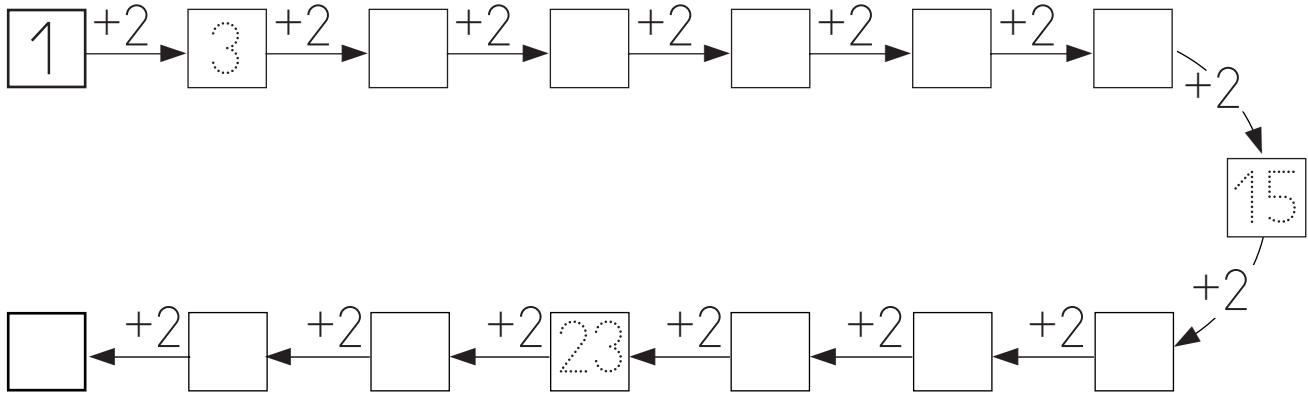


$$19 - 12 = \boxed{\phantom{00}}$$

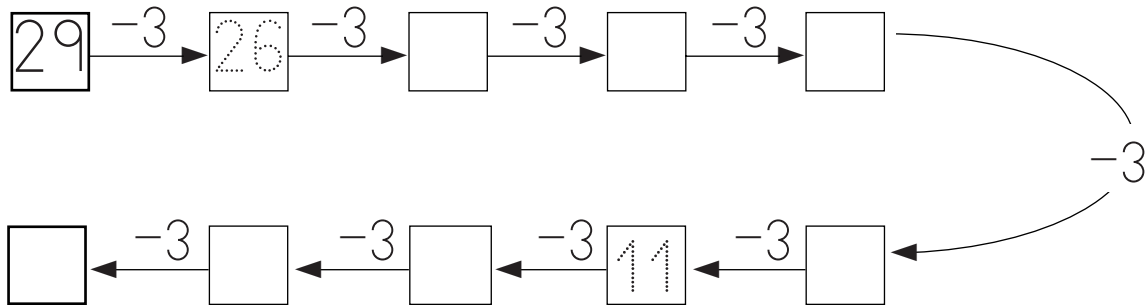


Nombre \_\_\_\_\_ Fecha \_\_\_\_\_

## 1. Completa.



## 2. Completa.



## 3. Completa.

Decenas	Unidades	=	Decenas	Unidades
1	7	=	2	6
2	3	=		
2	8	=		
1	4	=		



Nombre \_\_\_\_\_ Fecha \_\_\_\_\_

1. Completa.

10

20

30

40

50

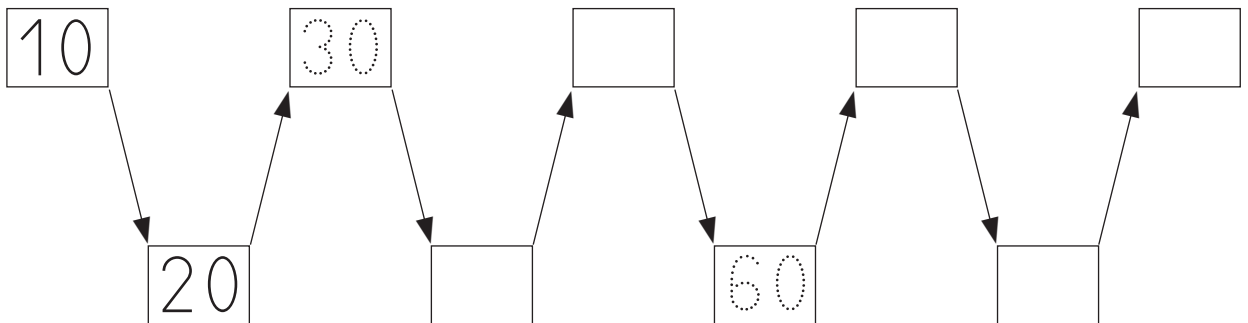
60

70

80

90

2. Completa.



3. Une.

Nombre \_\_\_\_\_ Fecha \_\_\_\_\_

**1. Suma.**

$20 + 30 = \square$

$30 + 10 = \square$

$50 + 30 = \square$

$50 + 20 = \square$

$40 + 40 = \square$

$60 + 30 = \square$

$20 + 40 = \square$

$30 + 40 = \square$

$30 + 30 = \square$

$70 + 20 = \square$

**2. Resta.**

$60 - 10 = \square$

$70 - 40 = \square$

$30 - 20 = \square$

$20 - 10 = \square$

$50 - 20 = \square$

$90 - 60 = \square$

$60 - 30 = \square$

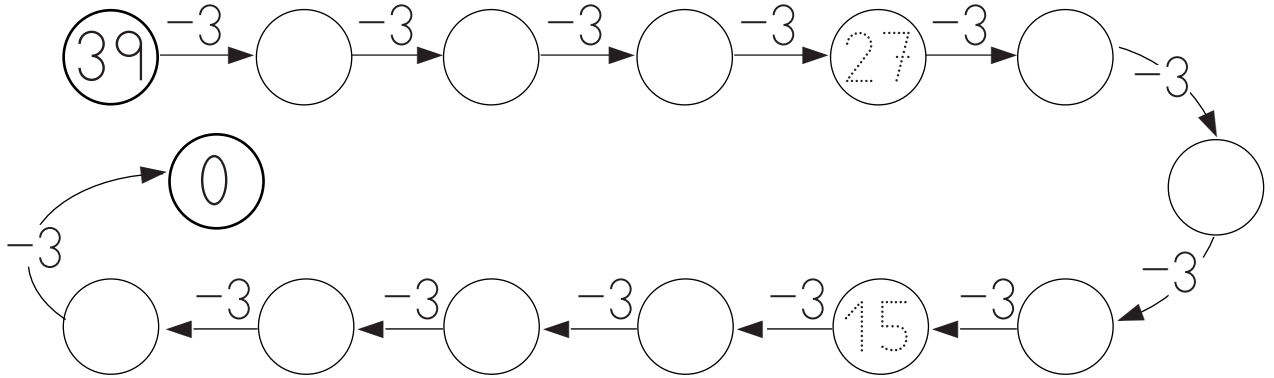
$40 - 20 = \square$

$80 - 50 = \square$

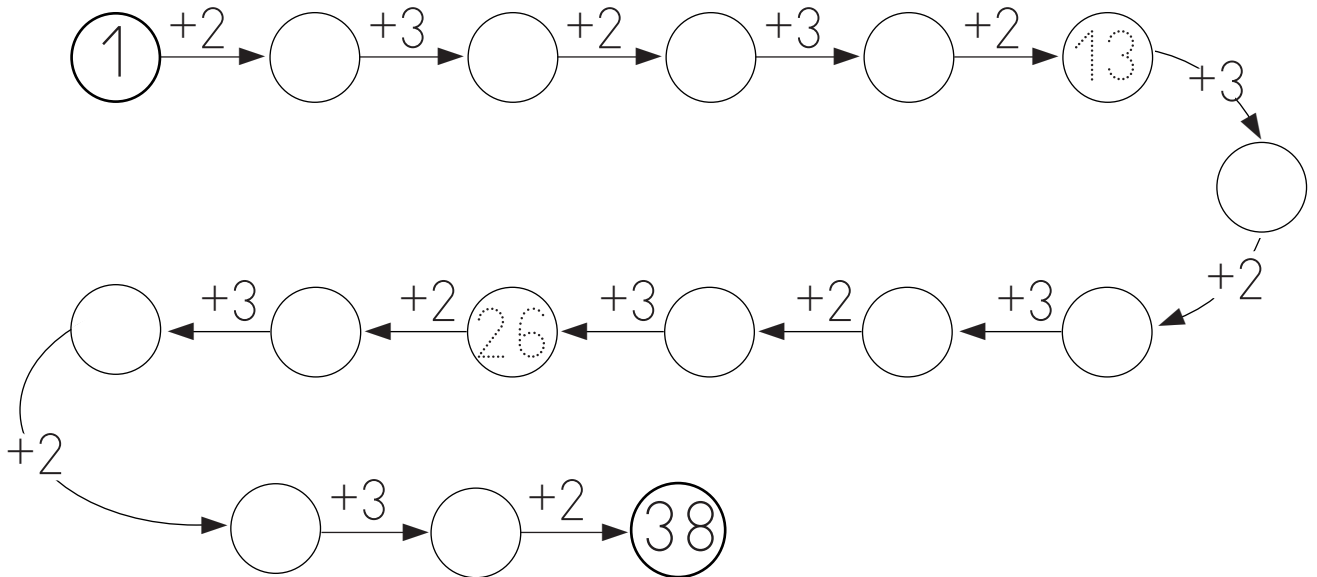
$70 - 60 = \square$

Nombre \_\_\_\_\_ Fecha \_\_\_\_\_


1. Completa.



2. Completa.



3. Escribe el número que falta.



Nombre \_\_\_\_\_ Fecha \_\_\_\_\_

1. Suma.

$\begin{array}{r} 15 \\ + 4 \\ \hline \square \end{array}$	$\begin{array}{r} 33 \\ + 5 \\ \hline \square \end{array}$	$\begin{array}{r} 12 \\ + 6 \\ \hline \square \end{array}$	$\begin{array}{r} 26 \\ + 3 \\ \hline \square \end{array}$	$\begin{array}{r} 14 \\ + 2 \\ \hline \square \end{array}$
--	--	--	--	--

$\begin{array}{r} 1 \\ + 28 \\ \hline \square \end{array}$	$\begin{array}{r} 4 \\ + 10 \\ \hline \square \end{array}$	$\begin{array}{r} 3 \\ + 34 \\ \hline \square \end{array}$	$\begin{array}{r} 6 \\ + 11 \\ \hline \square \end{array}$	$\begin{array}{r} 5 \\ + 22 \\ \hline \square \end{array}$
--	--	--	--	--

$\begin{array}{r} 21 \\ + 13 \\ \hline \square \end{array}$	$\begin{array}{r} 16 \\ + 13 \\ \hline \square \end{array}$	$\begin{array}{r} 34 \\ + 4 \\ \hline \square \end{array}$	$\begin{array}{r} 13 \\ + 22 \\ \hline \square \end{array}$	$\begin{array}{r} 25 \\ + 12 \\ \hline \square \end{array}$
---	---	--	---	---

$\begin{array}{r} 31 \\ + 4 \\ \hline \square \end{array}$	$\begin{array}{r} 22 \\ + 16 \\ \hline \square \end{array}$	$\begin{array}{r} 15 \\ + 11 \\ \hline \square \end{array}$	$\begin{array}{r} 28 \\ + 11 \\ \hline \square \end{array}$	$\begin{array}{r} 37 \\ + 2 \\ \hline \square \end{array}$
--	---	---	---	--

$\begin{array}{r} 11 \\ + 20 \\ \hline \square \end{array}$	$\begin{array}{r} 32 \\ + 6 \\ \hline \square \end{array}$	$\begin{array}{r} 20 \\ + 17 \\ \hline \square \end{array}$	$\begin{array}{r} 23 \\ + 3 \\ \hline \square \end{array}$	$\begin{array}{r} 17 \\ + 21 \\ \hline \square \end{array}$
---	--	---	--	---

Nombre \_\_\_\_\_ Fecha \_\_\_\_\_

**1. Escribe.**

40

cuarenta

50

41

51

42

52

43

53

44

54

45

55

46

56

47

57

48

58

49

59

Nombre \_\_\_\_\_ Fecha \_\_\_\_\_

1. Resta.

$\begin{array}{r} 49 \\ - 3 \\ \hline \square \end{array}$	$\begin{array}{r} 55 \\ - 34 \\ \hline \square \end{array}$	$\begin{array}{r} 35 \\ - 14 \\ \hline \square \end{array}$	$\begin{array}{r} 59 \\ - 5 \\ \hline \square \end{array}$	$\begin{array}{r} 48 \\ - 23 \\ \hline \square \end{array}$
--	---	---	--	---

$\begin{array}{r} 47 \\ - 23 \\ \hline \square \end{array}$	$\begin{array}{r} 55 \\ - 31 \\ \hline \square \end{array}$	$\begin{array}{r} 53 \\ - 30 \\ \hline \square \end{array}$	$\begin{array}{r} 37 \\ - 26 \\ \hline \square \end{array}$	$\begin{array}{r} 23 \\ - 12 \\ \hline \square \end{array}$
---	---	---	---	---

$\begin{array}{r} 35 \\ - 15 \\ \hline \square \end{array}$	$\begin{array}{r} 48 \\ - 26 \\ \hline \square \end{array}$	$\begin{array}{r} 57 \\ - 45 \\ \hline \square \end{array}$	$\begin{array}{r} 47 \\ - 2 \\ \hline \square \end{array}$	$\begin{array}{r} 59 \\ - 33 \\ \hline \square \end{array}$
---	---	---	--	---

$\begin{array}{r} 57 \\ - 40 \\ \hline \square \end{array}$	$\begin{array}{r} 58 \\ - 50 \\ \hline \square \end{array}$	$\begin{array}{r} 17 \\ - 15 \\ \hline \square \end{array}$	$\begin{array}{r} 38 \\ - 7 \\ \hline \square \end{array}$	$\begin{array}{r} 44 \\ - 23 \\ \hline \square \end{array}$
---	---	---	--	---

$\begin{array}{r} 52 \\ - 41 \\ \hline \square \end{array}$	$\begin{array}{r} 24 \\ - 12 \\ \hline \square \end{array}$	$\begin{array}{r} 56 \\ - 25 \\ \hline \square \end{array}$	$\begin{array}{r} 36 \\ - 10 \\ \hline \square \end{array}$	$\begin{array}{r} 53 \\ - 21 \\ \hline \square \end{array}$
---	---	---	---	---

Nombre \_\_\_\_\_ Fecha \_\_\_\_\_

1. Completa.

	Decenas	Unidades		Decenas	Unidades
56	5	6	6	0	
40			1	1	
2			0	9	
28			5	9	
37			7	7	

2. Suma 2 cada vez.

2	→		→		→		→		→		→		→		→		→		→	18
36	←		←		←		←		←		←		←		←		←		←	20
38	→		→		→		→		→		→		→		→		→		→	54
72	←		←		←		←		←		←		←		←		←		←	56

3. Suma 2 cada vez.

1	→	3	→	5	→		→		→		→		→		→		→		→	
35	←		←		←		←		←		←		←		←		←		←	19
37	→		→		→		→		→		→		→		→		→		→	

Nombre \_\_\_\_\_ Fecha \_\_\_\_\_

## 1. Escribe.

70 *setenta*

80

71 *setenta y uno*

81

72

82

73

83

74

84

75

85

76

86

77

87

78

88

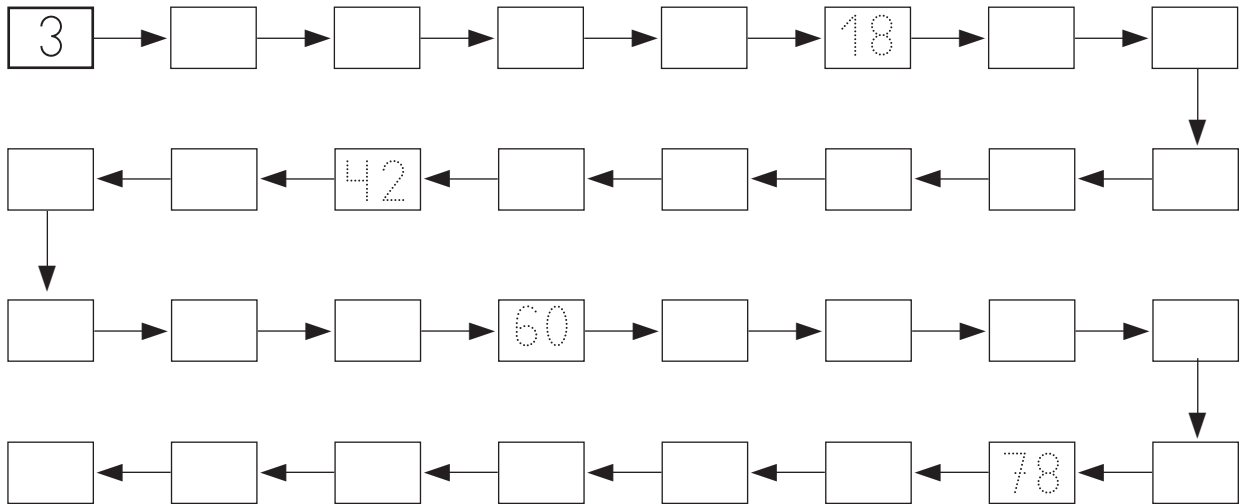
79

89

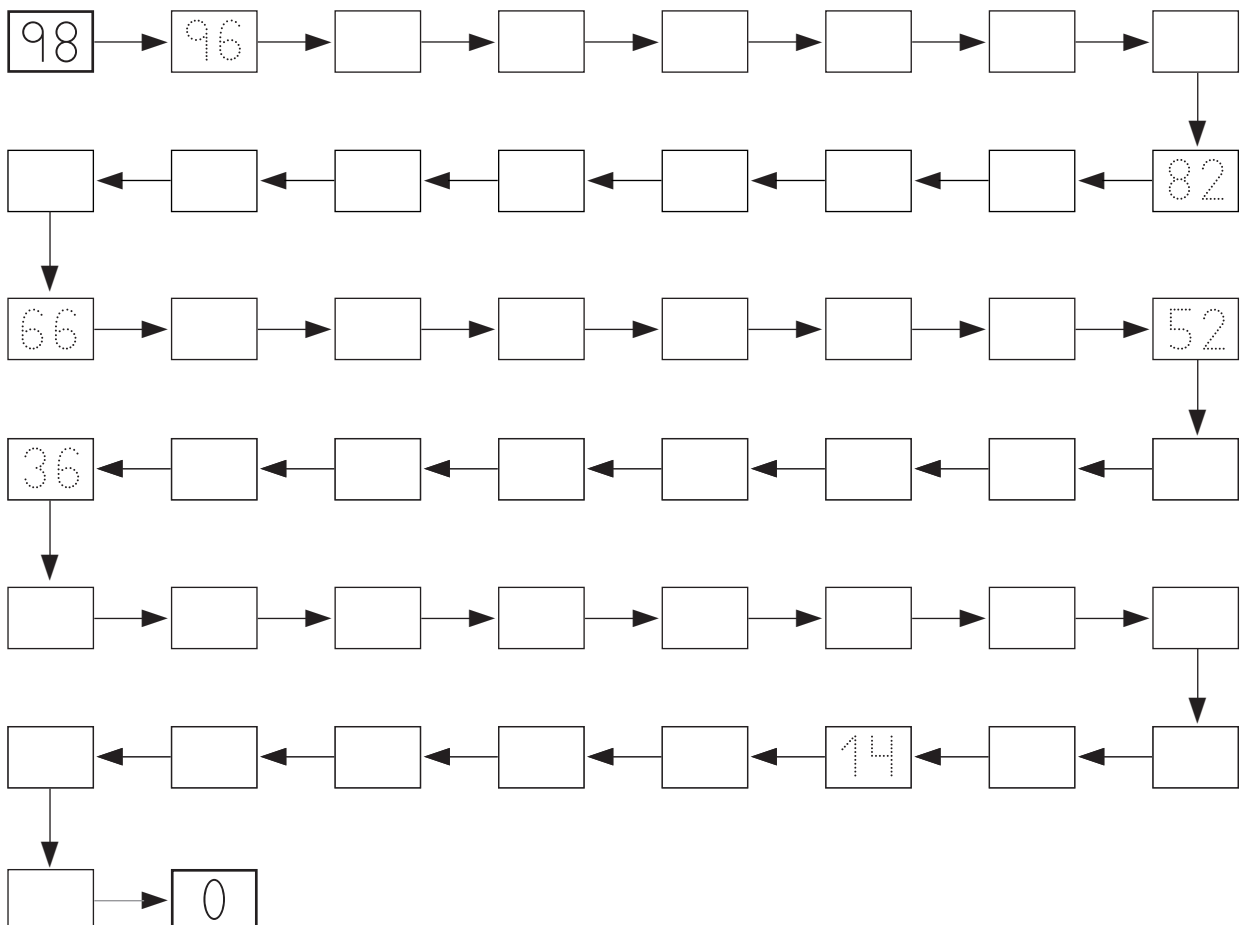


Nombre \_\_\_\_\_ Fecha \_\_\_\_\_

## 1. Suma 3 cada vez.



## 2. Resta 2 cada vez.



Nombre \_\_\_\_\_ Fecha \_\_\_\_\_

## 1. Escribe.

90

95

91

96

92

97

93

98

94

99

## 2. Escribe.

15

35

20

40

21

61

26

76

28

88

Nombre \_\_\_\_\_ Fecha \_\_\_\_\_

## 1. Calcula.

$\begin{array}{r} 30 \\ + 13 \\ \hline \square \end{array}$	$\begin{array}{r} 52 \\ + 34 \\ \hline \square \end{array}$	$\begin{array}{r} 64 \\ + 25 \\ \hline \square \end{array}$	$\begin{array}{r} 21 \\ + 33 \\ \hline \square \end{array}$	$\begin{array}{r} 72 \\ + 7 \\ \hline \square \end{array}$
---	---	---	---	--

$\begin{array}{r} 53 \\ - 21 \\ \hline \square \end{array}$	$\begin{array}{r} 19 \\ - 6 \\ \hline \square \end{array}$	$\begin{array}{r} 58 \\ - 16 \\ \hline \square \end{array}$	$\begin{array}{r} 75 \\ - 73 \\ \hline \square \end{array}$	$\begin{array}{r} 82 \\ - 61 \\ \hline \square \end{array}$
---	--	---	---	---

$\begin{array}{r} 95 \\ - 52 \\ \hline \square \end{array}$	$\begin{array}{r} 64 \\ - 62 \\ \hline \square \end{array}$	$\begin{array}{r} 42 \\ + 47 \\ \hline \square \end{array}$	$\begin{array}{r} 40 \\ - 10 \\ \hline \square \end{array}$	$\begin{array}{r} 43 \\ + 56 \\ \hline \square \end{array}$
---	---	---	---	---

$\begin{array}{r} 66 \\ + 30 \\ \hline \square \end{array}$	$\begin{array}{r} 49 \\ - 21 \\ \hline \square \end{array}$	$\begin{array}{r} 73 \\ + 4 \\ \hline \square \end{array}$	$\begin{array}{r} 60 \\ + 20 \\ \hline \square \end{array}$	$\begin{array}{r} 79 \\ - 64 \\ \hline \square \end{array}$
---	---	--	---	---

$\begin{array}{r} 90 \\ - 70 \\ \hline \square \end{array}$	$\begin{array}{r} 52 \\ + 27 \\ \hline \square \end{array}$	$\begin{array}{r} 97 \\ - 62 \\ \hline \square \end{array}$	$\begin{array}{r} 23 \\ + 45 \\ \hline \square \end{array}$	$\begin{array}{r} 89 \\ - 32 \\ \hline \square \end{array}$
---	---	---	---	---

Nombre \_\_\_\_\_ Fecha \_\_\_\_\_

1. Escribe > o <.

$42 \bigcirc 18$

$39 \bigcirc 34$

$81 \bigcirc 78$

$52 \bigcirc 67$

$42 \bigcirc 93$

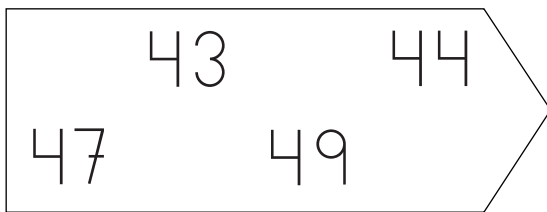
$15 \bigcirc 17$

$60 \bigcirc 25$


$69 \bigcirc 72$

$81 \bigcirc 18$

2. Ordena de menor a mayor.

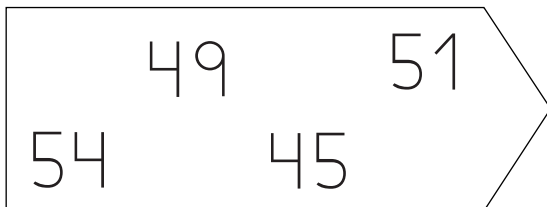


$\square < \square < \square < \square$




$\square < \square < \square < \square$

3. Ordena de mayor a menor.



$\square > \square > \square > \square$



$\square > \square > \square > \square$

## Sumas de tres números sin llevar

Nombre \_\_\_\_\_ Fecha \_\_\_\_\_

## 1. Suma.

$$\begin{array}{r} 33 \\ 12 \\ + 4 \\ \hline \square \end{array}$$

$$\begin{array}{r} 16 \\ 40 \\ + 2 \\ \hline \square \end{array}$$

$$\begin{array}{r} 62 \\ 6 \\ + 11 \\ \hline \square \end{array}$$

$$\begin{array}{r} 5 \\ 21 \\ + 70 \\ \hline \square \end{array}$$

$$\begin{array}{r} 24 \\ 12 \\ + 3 \\ \hline \square \end{array}$$

$$\begin{array}{r} 24 \\ 13 \\ + 51 \\ \hline \square \end{array}$$

$$\begin{array}{r} 65 \\ 11 \\ + 21 \\ \hline \square \end{array}$$

$$\begin{array}{r} 13 \\ 41 \\ + 31 \\ \hline \square \end{array}$$

$$\begin{array}{r} 6 \\ 52 \\ + 20 \\ \hline \square \end{array}$$

$$\begin{array}{r} 22 \\ 32 \\ + 42 \\ \hline \square \end{array}$$

$$\begin{array}{r} 32 \\ 42 \\ + 24 \\ \hline \square \end{array}$$

$$\begin{array}{r} 43 \\ 13 \\ + 23 \\ \hline \square \end{array}$$

$$\begin{array}{r} 32 \\ 61 \\ + 5 \\ \hline \square \end{array}$$

$$\begin{array}{r} 24 \\ 21 \\ + 42 \\ \hline \square \end{array}$$

$$\begin{array}{r} 24 \\ 30 \\ + 41 \\ \hline \square \end{array}$$

$$\begin{array}{r} 52 \\ 15 \\ + 22 \\ \hline \square \end{array}$$

$$\begin{array}{r} 70 \\ 10 \\ + 19 \\ \hline \square \end{array}$$

$$\begin{array}{r} 12 \\ 20 \\ + 13 \\ \hline \square \end{array}$$

$$\begin{array}{r} 83 \\ 2 \\ + 12 \\ \hline \square \end{array}$$

$$\begin{array}{r} 27 \\ 11 \\ + 60 \\ \hline \square \end{array}$$

Nombre \_\_\_\_\_ Fecha \_\_\_\_\_

1. Suma.

$\begin{array}{r} 58 \\ + 9 \\ \hline \square \end{array}$	$\begin{array}{r} 32 \\ + 9 \\ \hline \square \end{array}$	$\begin{array}{r} 26 \\ + 7 \\ \hline \square \end{array}$	$\begin{array}{r} 29 \\ + 6 \\ \hline \square \end{array}$	$\begin{array}{r} 38 \\ + 5 \\ \hline \square \end{array}$
--	--	--	--	--

$\begin{array}{r} 25 \\ + 5 \\ \hline \square \end{array}$	$\begin{array}{r} 43 \\ + 19 \\ \hline \square \end{array}$	$\begin{array}{r} 26 \\ + 25 \\ \hline \square \end{array}$	$\begin{array}{r} 47 \\ + 5 \\ \hline \square \end{array}$	$\begin{array}{r} 55 \\ + 16 \\ \hline \square \end{array}$
--	---	---	--	---

$\begin{array}{r} 29 \\ + 11 \\ \hline \square \end{array}$	$\begin{array}{r} 74 \\ + 18 \\ \hline \square \end{array}$	$\begin{array}{r} 28 \\ + 25 \\ \hline \square \end{array}$	$\begin{array}{r} 39 \\ + 25 \\ \hline \square \end{array}$	$\begin{array}{r} 46 \\ + 16 \\ \hline \square \end{array}$
---	---	---	---	---

$\begin{array}{r} 67 \\ + 29 \\ \hline \square \end{array}$	$\begin{array}{r} 38 \\ + 38 \\ \hline \square \end{array}$	$\begin{array}{r} 49 \\ + 32 \\ \hline \square \end{array}$	$\begin{array}{r} 42 \\ + 39 \\ \hline \square \end{array}$	$\begin{array}{r} 57 \\ + 38 \\ \hline \square \end{array}$
---	---	---	---	---

$\begin{array}{r} 36 \\ + 48 \\ \hline \square \end{array}$	$\begin{array}{r} 24 \\ + 57 \\ \hline \square \end{array}$	$\begin{array}{r} 38 \\ + 39 \\ \hline \square \end{array}$	$\begin{array}{r} 24 \\ + 46 \\ \hline \square \end{array}$	$\begin{array}{r} 19 \\ + 41 \\ \hline \square \end{array}$
---	---	---	---	---

## Sumas de tres números llevando

Nombre \_\_\_\_\_ Fecha \_\_\_\_\_

## 1. Suma.

$\begin{array}{r} 26 \\ 5 \\ + 4 \\ \hline \square \end{array}$	$\begin{array}{r} 38 \\ 7 \\ + 2 \\ \hline \square \end{array}$	$\begin{array}{r} 42 \\ 6 \\ + 5 \\ \hline \square \end{array}$	$\begin{array}{r} 52 \\ 9 \\ + 5 \\ \hline \square \end{array}$	$\begin{array}{r} 54 \\ 7 \\ + 3 \\ \hline \square \end{array}$
---	---	---	---	---

$\begin{array}{r} 16 \\ 15 \\ + 4 \\ \hline \square \end{array}$	$\begin{array}{r} 24 \\ 26 \\ + 6 \\ \hline \square \end{array}$	$\begin{array}{r} 23 \\ 12 \\ + 8 \\ \hline \square \end{array}$	$\begin{array}{r} 22 \\ 27 \\ + 5 \\ \hline \square \end{array}$	$\begin{array}{r} 44 \\ 21 \\ + 8 \\ \hline \square \end{array}$
--	--	--	--	--

$\begin{array}{r} 25 \\ 13 \\ + 16 \\ \hline \square \end{array}$	$\begin{array}{r} 8 \\ 50 \\ + 27 \\ \hline \square \end{array}$	$\begin{array}{r} 2 \\ 37 \\ + 49 \\ \hline \square \end{array}$	$\begin{array}{r} 58 \\ 23 \\ + 14 \\ \hline \square \end{array}$	$\begin{array}{r} 29 \\ 11 \\ + 23 \\ \hline \square \end{array}$
---	--	--	---	---

$\begin{array}{r} 54 \\ 20 \\ + 16 \\ \hline \square \end{array}$	$\begin{array}{r} 37 \\ 13 \\ + 20 \\ \hline \square \end{array}$	$\begin{array}{r} 31 \\ 19 \\ + 10 \\ \hline \square \end{array}$	$\begin{array}{r} 32 \\ 16 \\ + 14 \\ \hline \square \end{array}$	$\begin{array}{r} 14 \\ 14 \\ + 28 \\ \hline \square \end{array}$
---	---	---	---	---

Nombre \_\_\_\_\_ Fecha \_\_\_\_\_

1. Suma.

$$\begin{array}{r} 25 \\ + 65 \\ \hline \square \end{array}$$

$$\begin{array}{r} 29 \\ + 46 \\ \hline \square \end{array}$$

$$\begin{array}{r} 29 \\ + 53 \\ \hline \square \end{array}$$

$$\begin{array}{r} 42 \\ + 28 \\ \hline \square \end{array}$$

$$\begin{array}{r} 15 \\ + 38 \\ \hline \square \end{array}$$

2. Resta.

$$\begin{array}{r} 79 \\ - 59 \\ \hline \square \end{array}$$

$$\begin{array}{r} 38 \\ - 23 \\ \hline \square \end{array}$$

$$\begin{array}{r} 97 \\ - 66 \\ \hline \square \end{array}$$

$$\begin{array}{r} 86 \\ - 52 \\ \hline \square \end{array}$$

$$\begin{array}{r} 48 \\ - 24 \\ \hline \square \end{array}$$

3. Calcula.

$$\begin{array}{r} 89 \\ - 48 \\ \hline \square \end{array}$$

$$\begin{array}{r} 36 \\ + 49 \\ \hline \square \end{array}$$

$$\begin{array}{r} 39 \\ - 18 \\ \hline \square \end{array}$$

$$\begin{array}{r} 73 \\ - 22 \\ \hline \square \end{array}$$

$$\begin{array}{r} 26 \\ + 7 \\ \hline \square \end{array}$$

$$\begin{array}{r} 64 \\ + 18 \\ \hline \square \end{array}$$

$$\begin{array}{r} 64 \\ - 13 \\ \hline \square \end{array}$$

$$\begin{array}{r} 35 \\ + 56 \\ \hline \square \end{array}$$

$$\begin{array}{r} 94 \\ - 50 \\ \hline \square \end{array}$$

$$\begin{array}{r} 49 \\ + 49 \\ \hline \square \end{array}$$