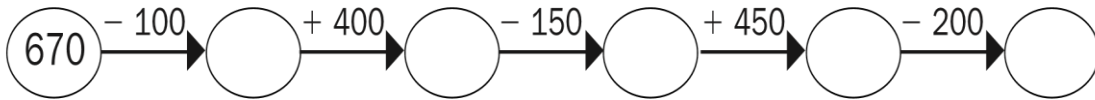
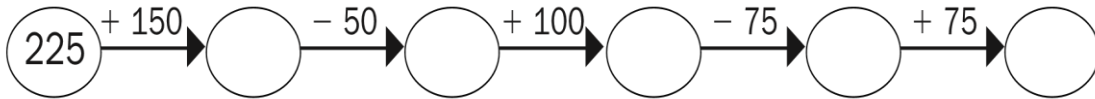
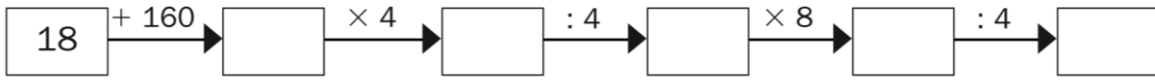
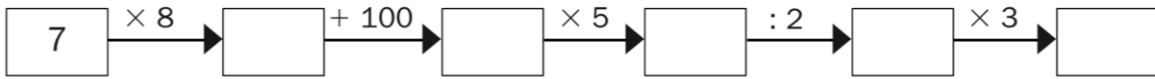


Completa las series.



• **Suma.**

$$(750 + 361) + 34 = \underline{\hspace{2cm}}$$

$$(828 + 108) + 250 = \underline{\hspace{2cm}}$$

$$1.116 + (110 + 25) = \underline{\hspace{2cm}}$$

$$237 + (309 + 394) = \underline{\hspace{2cm}}$$

$$452 - (65 + 10) = \underline{\hspace{2cm}}$$

$$(1.827 - 173) + 570 = \underline{\hspace{2cm}}$$