

Ficha 8

Nombre _____ Fecha _____

1 Multiplica.

$$\begin{array}{r} 222 \\ \times 3 \\ \hline \end{array}$$

$$\begin{array}{r} 323 \\ \times 3 \\ \hline \end{array}$$

$$\begin{array}{r} 120 \\ \times 2 \\ \hline \end{array}$$

$$\begin{array}{r} 421 \\ \times 3 \\ \hline \end{array}$$

$$\begin{array}{r} 143 \\ \times 2 \\ \hline \end{array}$$

$$\begin{array}{r} 302 \\ \times 3 \\ \hline \end{array}$$

$$\begin{array}{r} 210 \\ \times 4 \\ \hline \end{array}$$

$$\begin{array}{r} 112 \\ \times 4 \\ \hline \end{array}$$

2 Multiplica.

$$\begin{array}{r} 1243 \\ \times 2 \\ \hline \end{array}$$

$$\begin{array}{r} 2312 \\ \times 3 \\ \hline \end{array}$$

$$\begin{array}{r} 2020 \\ \times 4 \\ \hline \end{array}$$

$$\begin{array}{r} 2130 \\ \times 3 \\ \hline \end{array}$$

$$\begin{array}{r} 3210 \\ \times 3 \\ \hline \end{array}$$


$$\begin{array}{r} 1201 \\ \times 4 \\ \hline \end{array}$$

$$\begin{array}{r} 3421 \\ \times 2 \\ \hline \end{array}$$


$$\begin{array}{r} 1232 \\ \times 3 \\ \hline \end{array}$$

3 Coloca y multiplica.

$$432 \times 3$$



$$3.203 \times 3$$




4 Multiplica el número mayor por el número menor en cada caso.

141

2.102

12

3



25

4.203

2

3.200

