


Soan notas, si ou non?


Nome _____ Data _____

1 Completa a táboa co nome de cada un destes instrumentos.




Altura determinada	Altura indeterminada

2 Colorea e decora os vestidos de Altura e Duración con elementos musicais que fagan alusión ao seu nome.



3 Completa as seguintes fichas.




Instrumento: _____

Material: _____

Familia: _____

Grupo: _____



Instrumento: _____

Material: _____


Familia: _____

Grupo: _____


Comprueba

1.- ¿Cuántas líneas tiene el pentagrama? _____
 ¿Y cuántos espacios? _____


2- Dibuja la clave de sol



3.- Escribe la escala musical en el pentagrama:



4.- Di el nombre de estas notas:



5.- Completa:

- ◆ El compás de 3/4 tiene _____ pulsos
- ◆ El compás de 4/4 tiene _____ pulsos



Pinta de rojo los que sean compases de 3/4 y de azul los que sean compases de 4/4.

6.- Lee los siguientes ejercicios de ritmo:

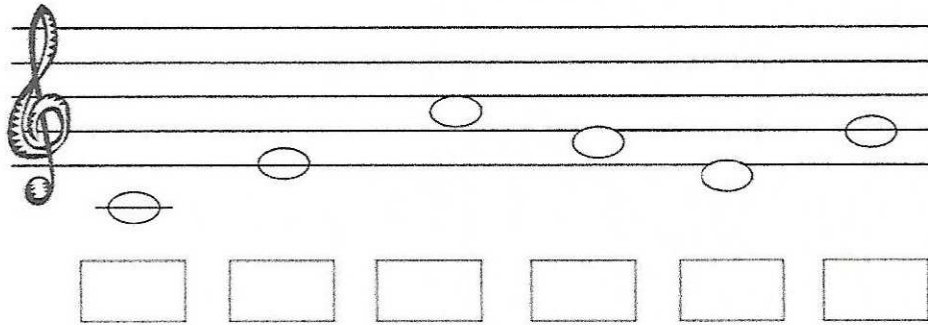
TAM
 TA
 TITI

3

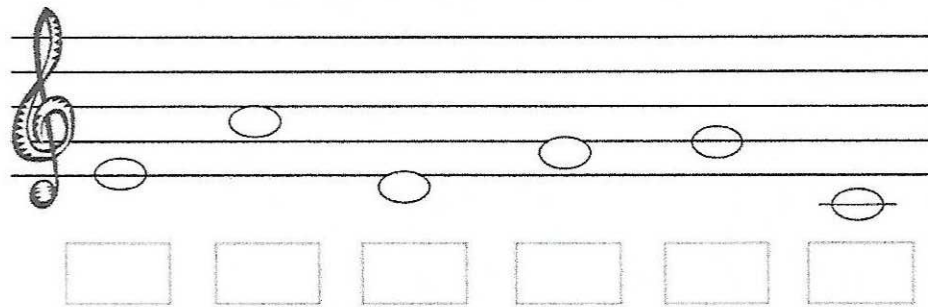
4



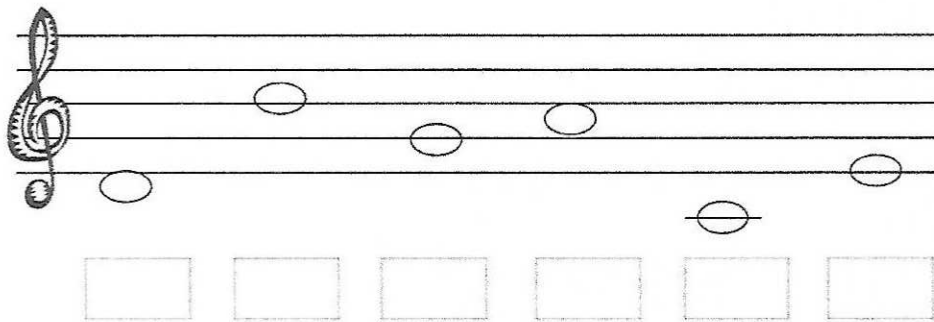
Escreve o nome das notas.



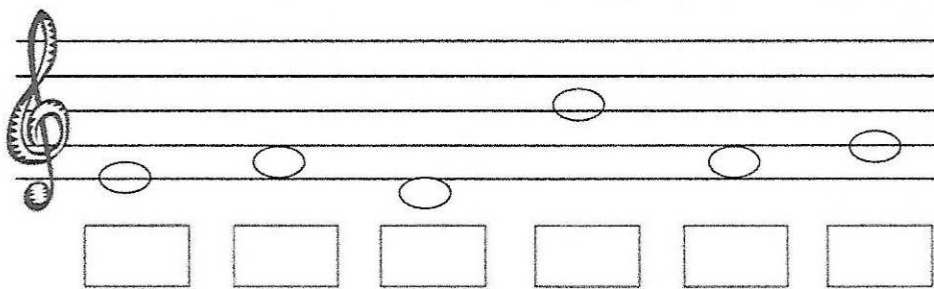
A musical staff in treble clef with six notes: G4 (first space), A4 (second space), B4 (third space), C5 (third line), D5 (fourth space), and E5 (fifth space). Below each note is an empty rectangular box for labeling.



A musical staff in treble clef with six notes: F4 (first space), G4 (second space), A4 (second line), B4 (third space), C5 (third line), and D5 (fourth space). Below each note is an empty rectangular box for labeling.



A musical staff in treble clef with six notes: E4 (first space), F4 (first line), G4 (second space), A4 (second line), B4 (third space), and C5 (third line). Below each note is an empty rectangular box for labeling.



A musical staff in treble clef with six notes: D4 (first line), E4 (first space), F4 (first line), G4 (second space), A4 (second line), and B4 (third space). Below each note is an empty rectangular box for labeling.