

Nombre _____ Fecha _____

1 Escribe $>$ o $<$.

$42 \bigcirc 18$

$39 \bigcirc 34$

$51 \bigcirc 48$

$52 \bigcirc 47$

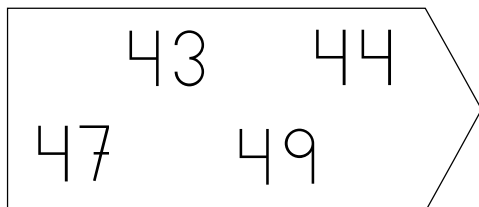
$42 \bigcirc 53$

$15 \bigcirc 17$

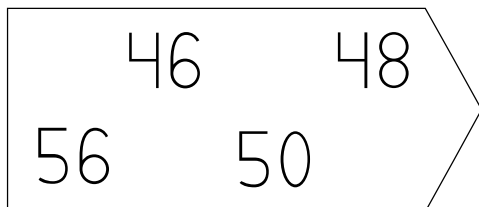
$30 \bigcirc 25$

$39 \bigcirc 42$

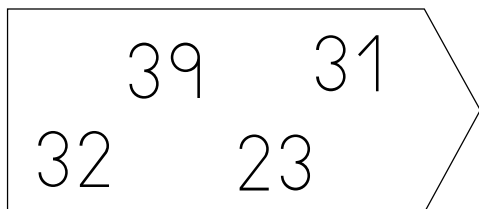
$43 \bigcirc 34$

2 Ordena de menor a mayor.


$\square < \square < \square < \square$



$\square < \square < \square < \square$

3 Ordena de mayor a menor.

$\square > \square > \square > \square$



$\square > \square > \square > \square$